


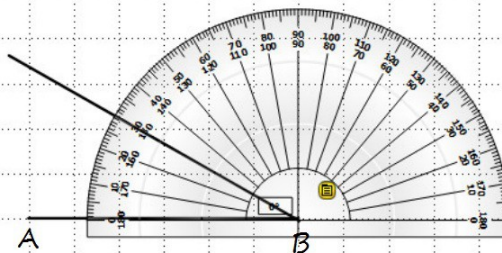
On peut tracer des triangles en suivant les instructions :

Construire un triangle ABC, avec  $AB = 6\text{ cm}$ ,  $BC = 4\text{ cm}$  et  $\widehat{ABC} = 30^\circ$ .

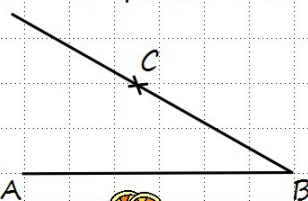
Etape 1 : On trace  $[AB]$  :



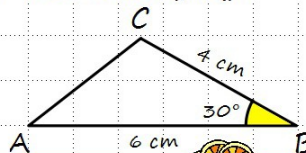
Etape 2 : On trace  $\widehat{ABC}$  :



Etape 3 : On place C à 4 cm de B :




Etape 4 : On trace  $[AC]$  :



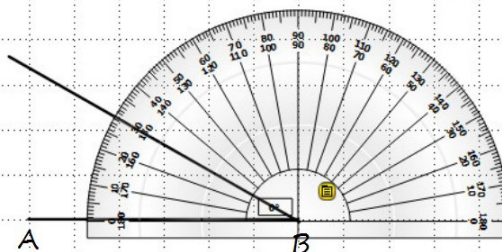
On peut tracer des triangles en suivant les instructions :

Construire un triangle ABC, avec  $AB = 6\text{ cm}$ ,  $BC = 4\text{ cm}$  et  $\widehat{ABC} = 30^\circ$ .

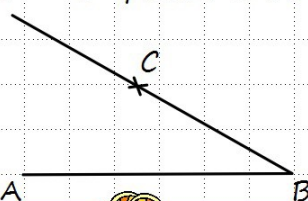
Etape 1 : On trace  $[AB]$  :



Etape 2 : On trace  $\widehat{ABC}$  :



Etape 3 : On place C à 4 cm de B :



Etape 4 : On trace  $[AC]$  :

