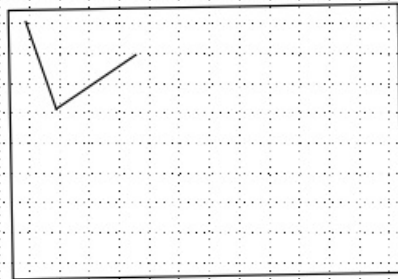


Vendredi 13 octobre 2012

Les angles

Exercice n° 1 p. 36 :

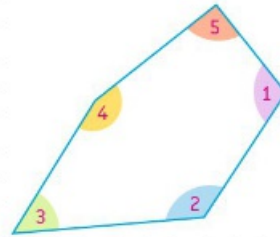


a) la part a été découpée dans le gâteau 3. On le vérifie grâce à un gabarit.

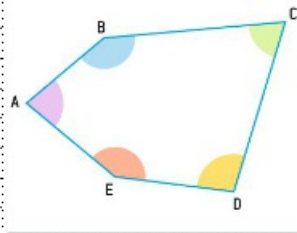
Exercice n° 2 p. 36 :

angles obtus :

① ② ④



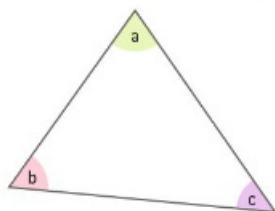
Exercice n° 3 p. 36 :



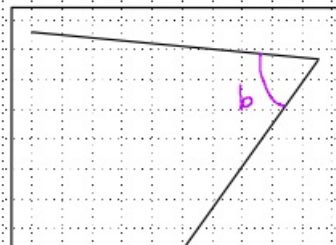
Angles aigus :

① ③

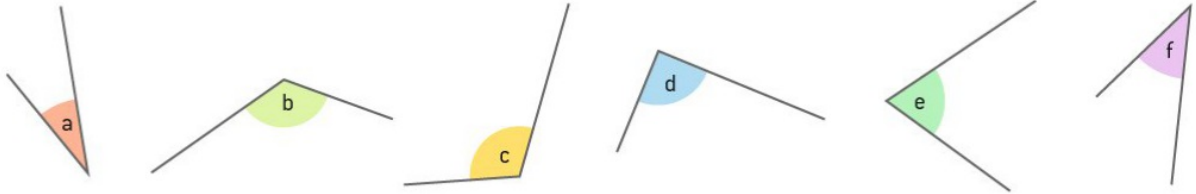
Exercice n° 4 p. 37 :



$c < b < a$



Esercizio n. 5 p. 37:



$$a < f < e < d < c < b$$

Esercizio n. 6 p. 37:

